

TEKS 7.6.C



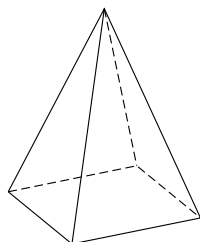
LESSON  
**10-1**

**Practice**

*Introduction to Three-Dimensional Figures*

Identify the base or bases of each figure. Then name the figure.

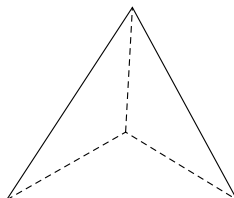
1.



\_\_\_\_\_

\_\_\_\_\_

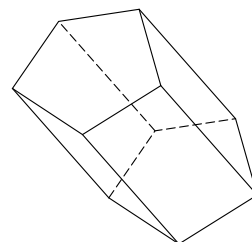
2.



\_\_\_\_\_

\_\_\_\_\_

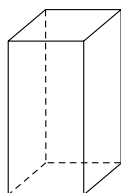
3.



\_\_\_\_\_

\_\_\_\_\_

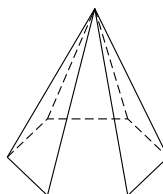
4.



\_\_\_\_\_

\_\_\_\_\_

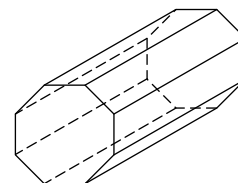
5.



\_\_\_\_\_

\_\_\_\_\_

6.

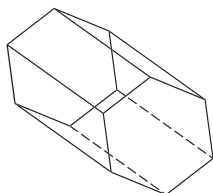


\_\_\_\_\_

\_\_\_\_\_

Classify each figure as a polyhedron or not a polyhedron. Then name the figure.


7.



\_\_\_\_\_

\_\_\_\_\_

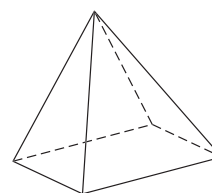
8.



\_\_\_\_\_

\_\_\_\_\_

9.



\_\_\_\_\_

\_\_\_\_\_

10.



\_\_\_\_\_

\_\_\_\_\_

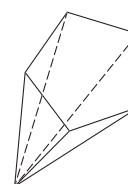
11.



\_\_\_\_\_

\_\_\_\_\_

12.



\_\_\_\_\_

\_\_\_\_\_