

TEKS 7.9.A

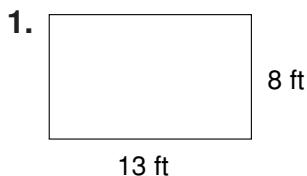


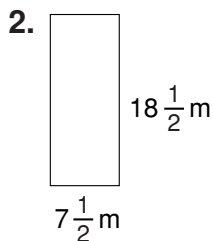
LESSON
9-3


Practice

Area of Parallelograms

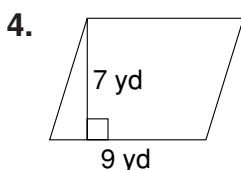
Find the area of each rectangle.

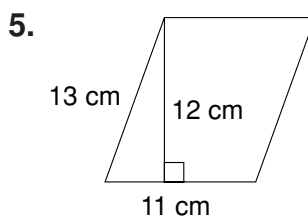


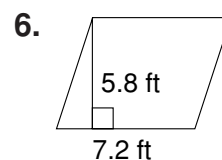


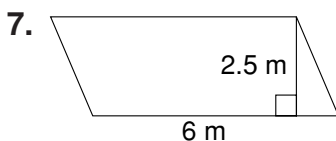


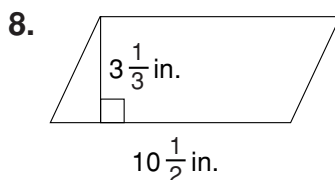
Find the area of each parallelogram.

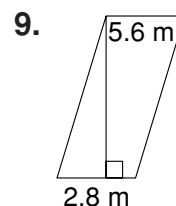












10. A dollar bill is 15.5 cm long and 6.5 cm wide. What is the area of a dollar bill?

11. A rectangular hallway has an area of 70 ft². The width of the hallway is 4 feet. What is the length of the hallway?
